

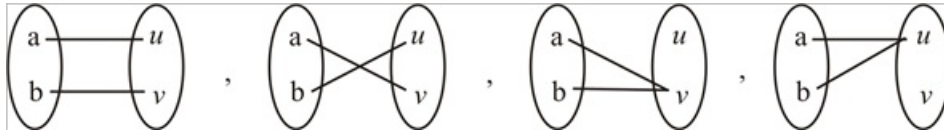
Problem

- a. Find all functions from $X = \{a, b\}$ to $Y = \{u, v\}$.
- b. Find all functions from $X = \{a, b, c\}$ to $Y = \{u\}$.
- c. Find all functions from $X = \{a, b, c\}$ to $Y = \{u, v\}$.

Step-by-step solution

Step 1 of 3

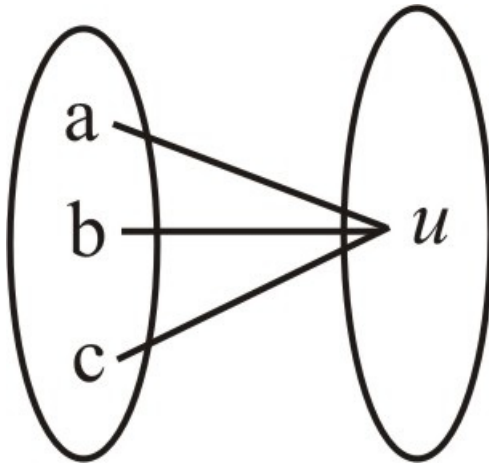
(a)



These are the functions from X to Y

Step 2 of 3

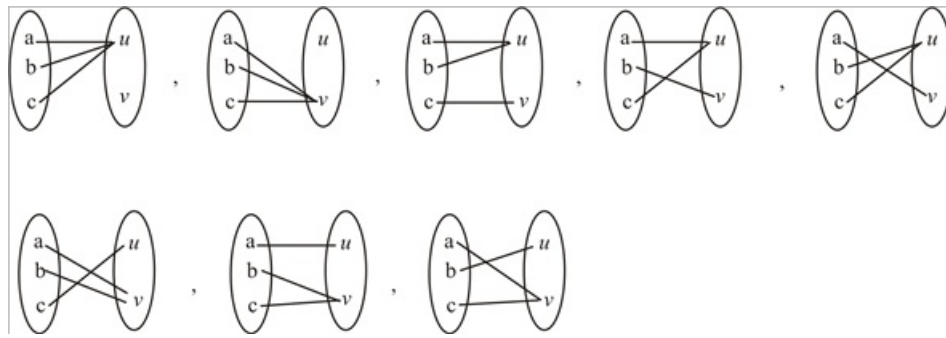
(b)



This is the only possible function from X to Y

Step 3 of 3

(c)



These are the functions from X to Y