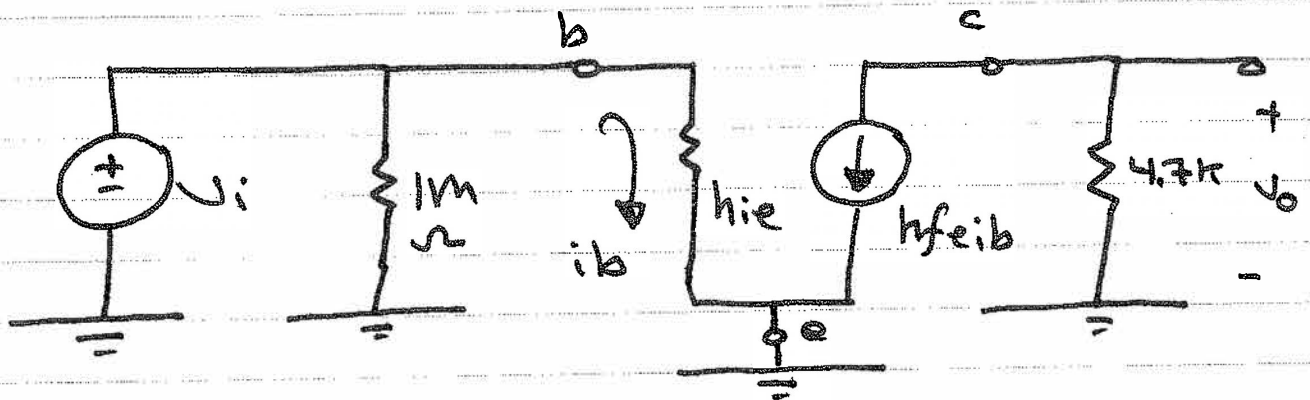


ENEE2360 CH5 Homework Solutions

5.12

ac small signal equivalent circuit :



$$V_o = -h_{fe} i_b (4.7k)$$

$$i_b = \frac{V_i}{h_{ie}}$$

$$\therefore A_v = \frac{V_o}{V_i} = - \frac{h_{fe}}{h_{ie}} (4.7k) = -160$$

$$\therefore h_{ie} = 2.644k\Omega$$

$$h_{ie} = \frac{\beta V_T}{I_{CQ}}$$

$$\therefore I_{CQ} = 0.875mA \quad ; \quad \beta = 90$$

$$\therefore I_B = \frac{I_{CQ}}{\beta} = 9.7\mu A$$

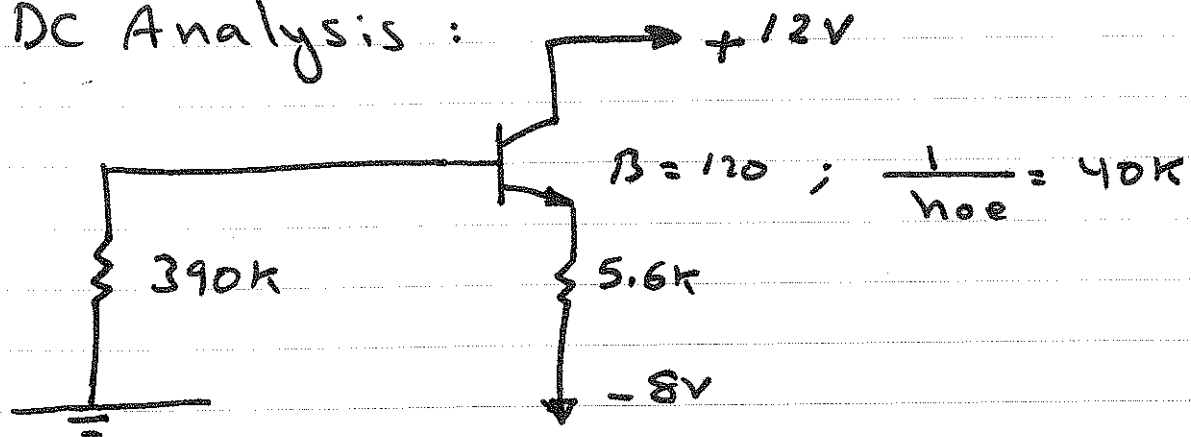
$$I_B = \frac{V_{CC} - V_{BE}}{1M\Omega} = 9.7\mu A$$

$$\therefore V_{CC} = 10.42V$$

-1-

5.25

DC Analysis :



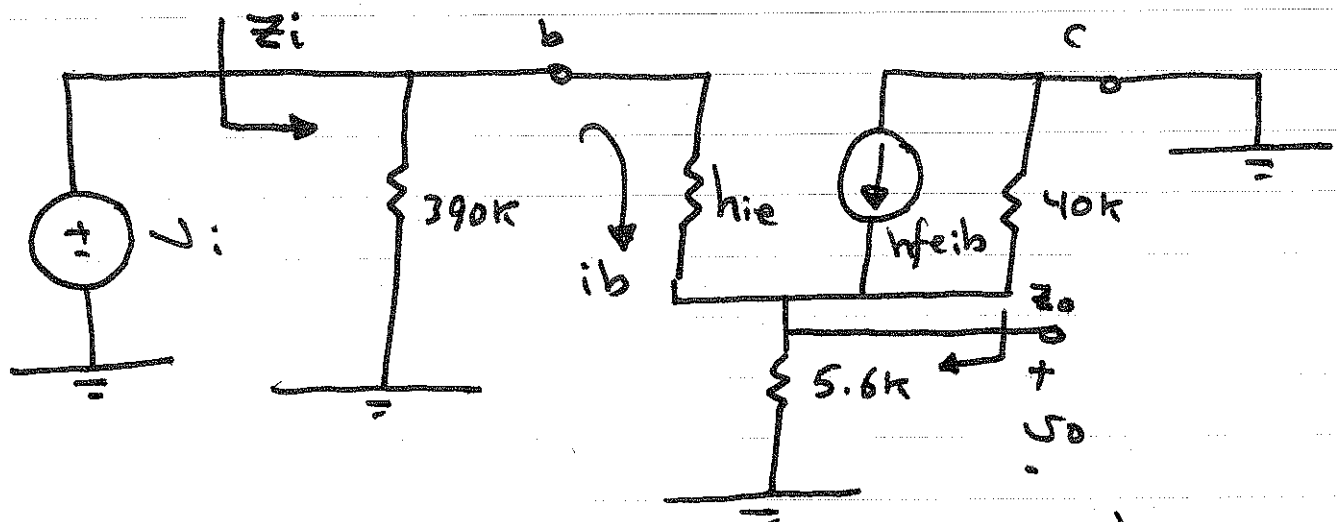
$$390k I_B + V_{BE} + 5.6k I_E - 8 = 0$$

$$\therefore I_B = \frac{8 - 0.7}{390k + (\beta + 1) 5.6k} = 6.838 \mu A$$

$$I_C = \beta I_B = 0.820 \text{ mA}$$

$$h_{ie} = \frac{\beta V_T}{I_{CQ}} = 1.76k$$

ac Small Signal equivalent Circuit:



$$Z_i = 390k \parallel \left(h_{ie} + (5.6k \parallel 40k)(h_{fe} + 1) \right) = 236k$$

$$V_o = (5.6k \parallel 40k) i_e$$

$$i_e = (1 + h_{fe}) i_b$$

$$i_b = \frac{V_i}{h_{ie} + (5.6k \parallel 40k)(h_{fe} + 1)}$$

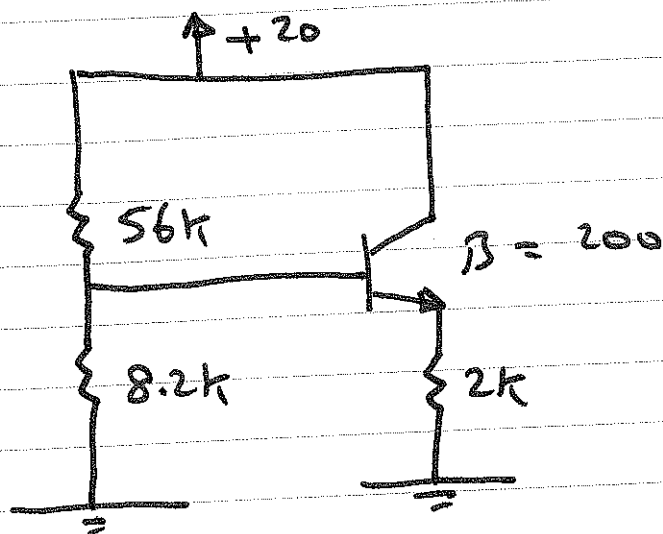
$$\therefore A_v = 0.993$$

$$Z_o = 5.6k \parallel 40k \parallel \frac{h_{ie}}{h_{fe} + 1}$$

$$Z_o = 30.8 \Omega$$

5.26

DC Analysis :



$$R_{TH} = 8.2k \parallel 56k = 7.157k \Omega$$

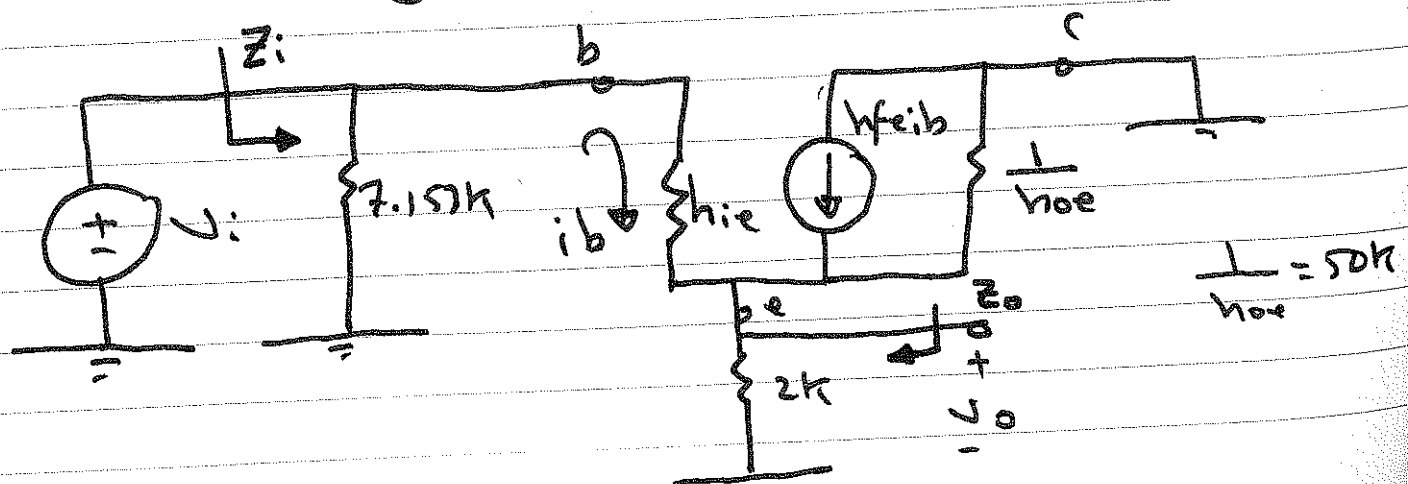
$$V_{TH} = \frac{8.2k}{8.2k + 56k} \cdot 20 = 2.55V$$

$$I_B = \frac{V_{TH} - 0.7}{R_{TH} + (\beta + 1)(2k)} = 4.52 \mu A$$

$$I_C = \beta I_B = 0.904 mA$$

$$h_{ie} = \frac{\beta V_T}{I_{CQ}} = 5.68k \Omega$$

ac small signal equivalent circuit :



$$v_o = (2k \parallel \frac{1}{h_{oe}}) i_e$$

$$i_e = (h_{fe} + 1) i_b$$

$$i_b = \frac{v_i}{h_{ie} + (2k \parallel \frac{1}{h_{oe}}) (h_{fe} + 1)}$$

$$\therefore A_v = 0.984$$

$$Z_i = 7.153k \parallel \left(h_{ie} + (2k \parallel 50k) (201) \right)$$

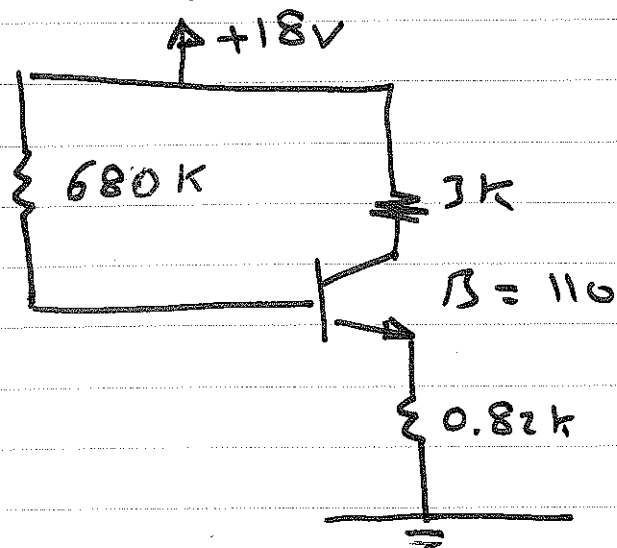
$$Z_i = 7k$$

$$Z_o = (2k \parallel 50k) \parallel \frac{h_{ie}}{201}$$

$$Z_o = 27.9 \Omega$$

5.40

DC Analysis :

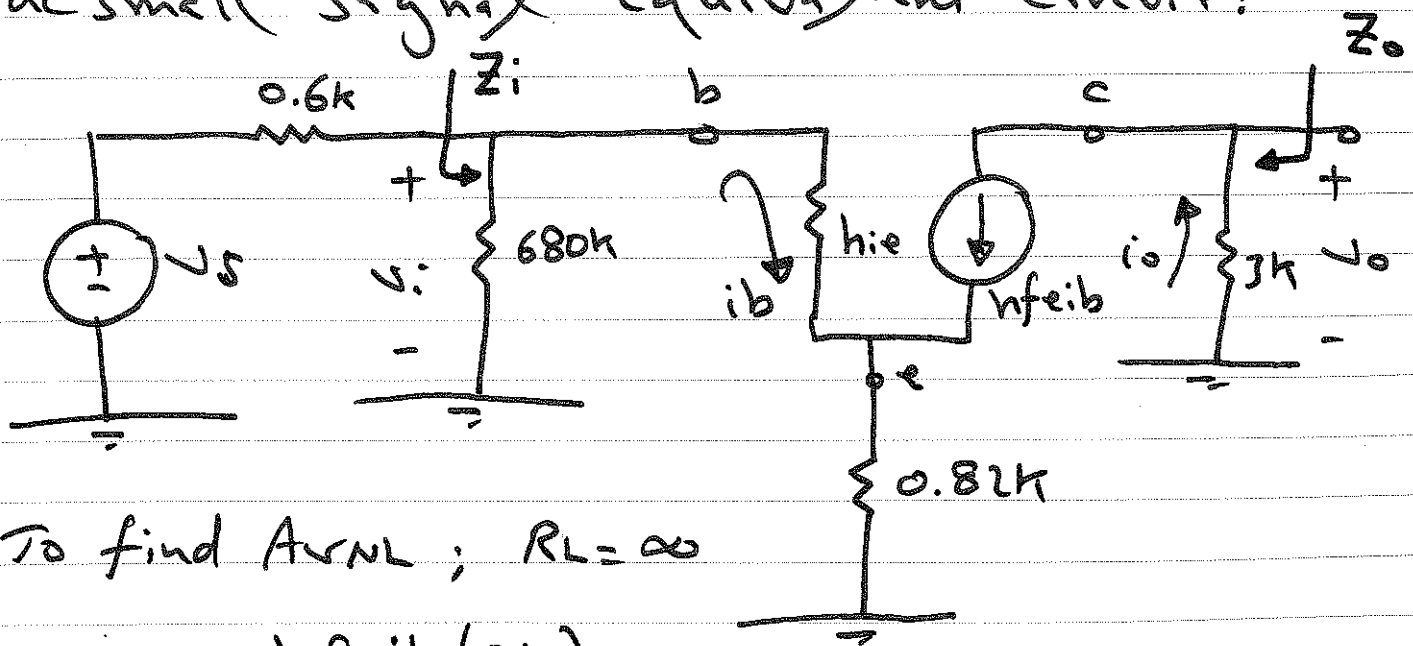


$$I_B = \frac{18 - 0.7}{680k + 111(0.82k)} = 22.44 \mu A$$

$$I_C = \beta I_B = 2.468 \text{ mA}$$

$$h_{ie} = \frac{\beta V_T}{I_{CQ}} = 1.145k$$

ac small signal equivalent circuit:



To find A_{vNL} ; $R_L = \infty$

$$V_o = -h_{fe}i_b(3k)$$


$$i_b = \frac{V_i}{h_{ie} + (h_{fe} + 1)(0.82k)}$$

$$\therefore A_{vNL} = -3.58$$

$$Z_o = 3k$$

$$Z_i = 680k \parallel \left(h_{ie} + (h_{fe} + 1)(0.82k) \right)$$

$$Z_i = 81.16k$$



$$A_{vL} = \frac{R_L}{R_L + 3k} (-3.58)$$

$$\therefore A_{vL} = \frac{V_o}{V_i} = -2.185$$

$$A_{vS} = \frac{V_o}{V_s} = \frac{V_o}{V_i} \cdot \frac{V_i}{V_s}$$

$$V_i = \frac{81.16k}{81.16k + 0.6k} V_s$$

$$\therefore A_{vS} = -2.169$$

-7-

To find A_i : $A_i = \frac{i_o}{i_i}$

$$i_o = h_{fe} i_b$$

$$i_b = i_i \frac{680k}{680k + h_{ie} + (h_{fe} + 1)(0.82k)}$$

$$\therefore A_i = 96.87$$